

Name:_____

NetID:_____ Lecture: A B

Discussion: Thursday Friday 9 10 11 12 1 2 3 4 5 6

1. (8 points) Here is a grammar with start symbol S and terminal symbols a and b . Draw three parse trees for the string **abba** that match this grammar.

$$S \rightarrow S S \mid a S \mid S a \mid b$$

2. (4 points) Check the (single) box that best characterizes each item.

The mathematical symbol for
an empty (zero-length) string

 \emptyset ☐e ☐ ϵ ☐NULL ☐

Number of nodes at level
 k in a full complete
binary tree.

 2^k ☐ $2^k - 1$ ☐ $2^{k+1} - 1$ ☐ 2^{k-1} ☐

Name: _____

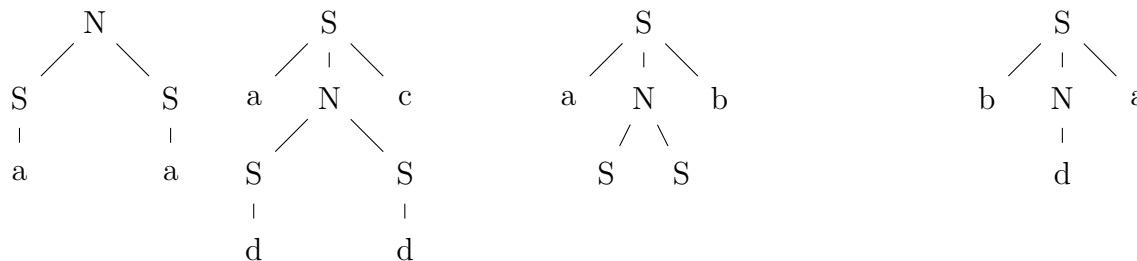
NetID: _____

Lecture: A B

Discussion: Thursday Friday 9 10 11 12 1 2 3 4 5 6

1. (8 points) Here is a grammar with start symbol S and terminal symbols a , b , c , and d . Circle the trees that match the grammar.

$$\begin{aligned} S &\rightarrow b N a \mid a N c \mid a \\ N &\rightarrow S S \mid d \end{aligned}$$



2. (4 points) Check the (single) box that best characterizes each item.

Number of bit strings of length k .

 2^k ☐ $2^k - 1$ ☐ 2^{k-1} ☐ k ☐

A full m -ary tree with i internal nodes has $mi + 1$ nodes total.

always ☐sometimes ☐never ☐

Name: _____

NetID: _____ Lecture: A B

Discussion: Thursday Friday 9 10 11 12 1 2 3 4 5 6

1. (8 points) Consider the following grammar G

$$\begin{aligned} S &\rightarrow S S \mid a N \mid a a \\ N &\rightarrow S a \mid a b \end{aligned}$$

S is the only start symbol. The terminal symbols are a and b

Here are two sequences of leaf labels. For each sequence, either draw a tree from grammar G whose leaves have this sequence of labels, or else explain briefly why G cannot generate this sequence of leaf labels.

aaba

ab

2. (4 points) Check the (single) box that best characterizes each item.

A binary tree of height h has at least $2^{h+1} - 1$ nodes.

true ☐ false ☐

The level of the root node in a tree of height h .

0 ☐ 1 ☐ $h - 1$ ☐ h ☐ $h + 1$ ☐

Name: _____

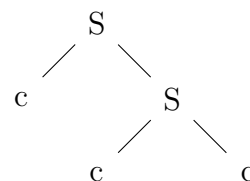
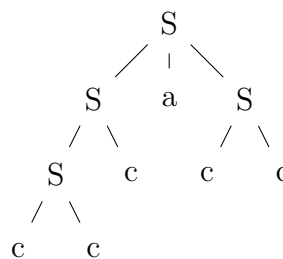
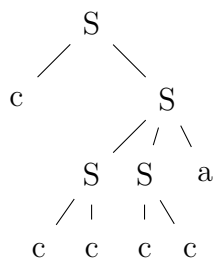
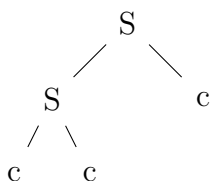
NetID: _____

Lecture: A B

Discussion: Thursday Friday 9 10 11 12 1 2 3 4 5 6

1. (8 points) Here is a grammar, with start variable S and terminals a and c . Circle the trees that match the grammar.

$$S \rightarrow S a S \mid S c \mid c c$$



2. (4 points) Check the (single) box that best characterizes each item.

A binary tree of height h has at least $2^h - 1$ nodes.

true ☐false ☐

Number of bit strings of length $\leq k$.

 2^k ☐ $2^k - 1$ ☐ 2^{k-1} ☐ $2^{k+1} - 1$ ☐

Name: _____

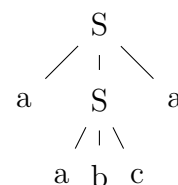
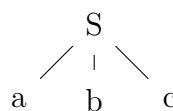
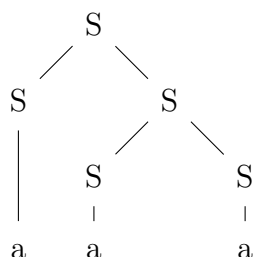
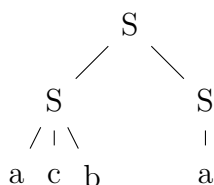
NetID: _____

Lecture: A B

Discussion: Thursday Friday 9 10 11 12 1 2 3 4 5 6

1. (8 points) Here is a grammar with start symbol S and terminals symbols a, b , and c . Circle the trees that match the grammar.

$$S \rightarrow S S \mid a b c \mid a$$



2. (4 points) Check the (single) box that best characterizes each item.

The number of nodes in a binary tree of height h

$\geq 2^h$	<input type="checkbox"/>	$2^{h+1} - 1$	<input type="checkbox"/>
$\leq 2^{h+1} - 1$	<input type="checkbox"/>	$\geq 2^{h+1} - 1$	<input type="checkbox"/>

The diameter of a tree of height h .

$\leq h$	<input type="checkbox"/>	h	<input type="checkbox"/>	$h + 1$	<input type="checkbox"/>
$2h$	<input type="checkbox"/>	$\leq 2h$	<input type="checkbox"/>		

Name: _____

NetID: _____ Lecture: A B

Discussion: Thursday Friday 9 10 11 12 1 2 3 4 5 6

1. (8 points) Consider the following grammar G

$$S \rightarrow b a S \mid S S \mid c \mid c a$$

S is the only start symbol. The terminal symbols are a , b , and c .

Here are two sequences of leaf labels. For each sequence, either draw a tree from grammar G whose leaves have this sequence of labels, or else explain briefly why G cannot generate this sequence of leaf labels.

baba

bacca

2. (4 points) Check the (single) box that best characterizes each item.

The number of leaves in a binary tree of height h

 2^h ☐ $2^{h+1} - 1$ ☐ $\geq 2^h$ ☐ $\leq 2^h$ ☐

The diameter of a full, complete 7-ary tree of height h .

 $\leq h$ ☐ h ☐ $h + 1$ ☐ $2h$ ☐ $7h$ ☐ $7h + 1$ ☐